





Name Intervals I


Name the interval above the given tonic, for example, 3rd.

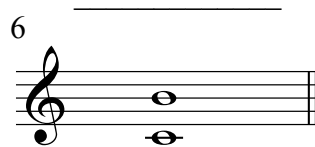
1 


2 


3 

4 


5 _____



6 _____



7 _____



8 _____


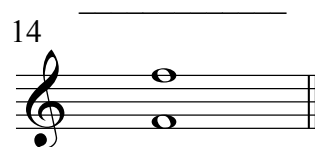
9 _____



10 _____



11 _____



12 _____



13 _____


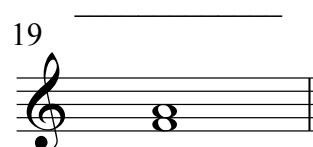
14 _____


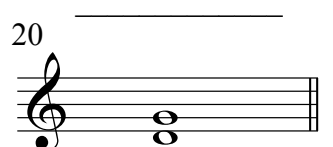
15 _____


16 _____



17 _____



18 _____



19 _____



20 _____


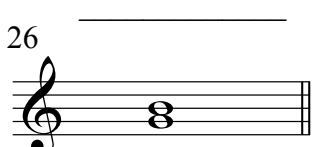
21 _____


22 _____



23 _____


24 _____


25 _____


26 _____


27 _____


28 _____


Name Intervals I

2
29

30

31

32

33

34

35

36

37

38

39

40

41

42

43

44

45

46

47

48

49

50

51

52

53

54

55

56

57

58

59

60
